
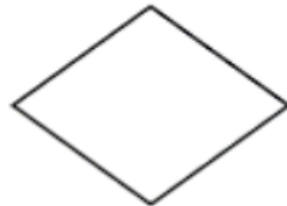
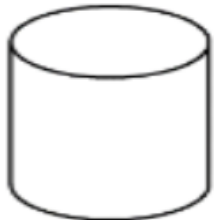
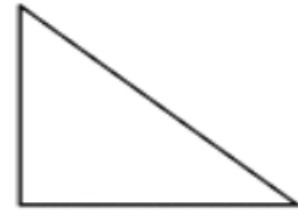
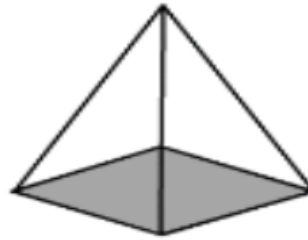
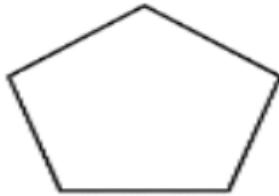
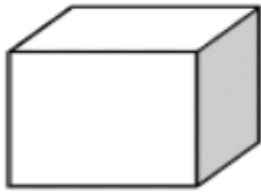


Part A

- 1) Which of these show 3-D shapes?
- 2) Name the 3-D shapes you can see



Challenge - Which 3-D shapes we have looked at today are missing?



Part B - match the description to the 3-D shape and name it

This shape has five faces. It has eight edges and five vertices.

This shape has eight vertices, six square faces and twelve edges.

This shape has three pairs of parallel rectangular faces.

