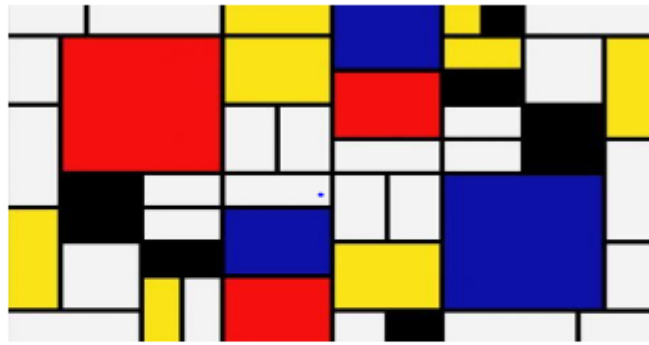
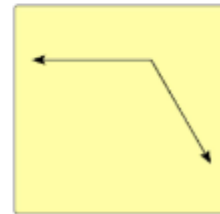
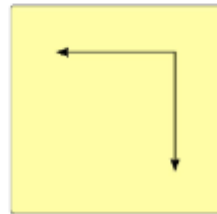
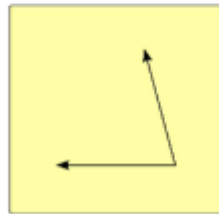


Part A

Can you spot horizontal and vertical lines in this artwork?



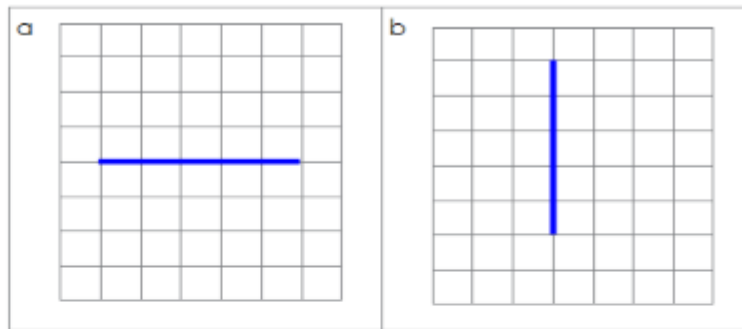
Find pairs of perpendicular lines



2

Part B

1 Draw lines which are perpendicular to **a** and **b**



2. True or false?

If 2 straight lines meet at a right angle they are always perpendicular

3



Part C - Challenge.

Use your right-angle checker to draw a line from from the black dots which are perpendicular to the blue lines

a



b

