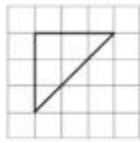
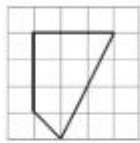
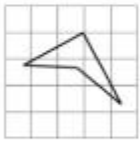


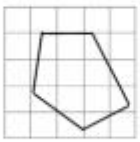
Part A


Find the perpendicular lines in these shapes

a 

b 

c 

d 

e 

This shape has more than one pair of perpendicular lines. Can you find them all?



Any 2 straight lines that meet are perpendicular

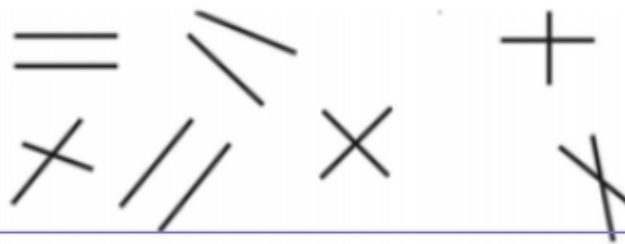
Do you think this is true or false?

Explain...



Part B

1. Which of these lines are perpendicular?



2. This shape contains 4 pairs of perpendicular lines



True or false? How do you know?

