

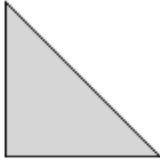
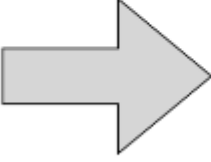
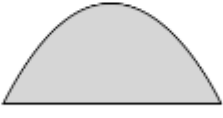
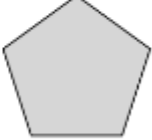


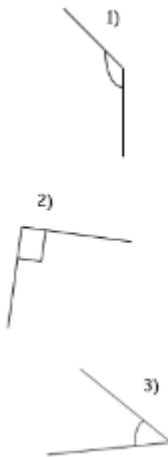
**Part A Decide which of these shapes have right angles**

1) 	2) 	3) 
4) 	5) 	6) 

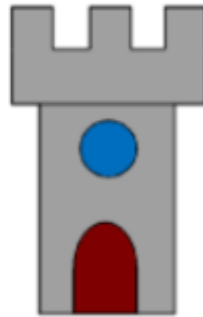
**Challenge** - Which do you think has the most right angles?

**Part B**

1. Find the right angle below



2. Circle all the right angles in this picture



**Challenge** - Draw shapes that have 1, 2, and 4 right angles