





Part 1

Complete the missing boxes in the table to compare the fractions.

No.	Fraction 1	<, > or =	Fraction 2	Statement
E.g.	$\frac{3}{4}$	>	$\frac{1}{4}$	One quarter is less than three quarters.
1)				
2)	$\frac{4}{8}$			
3)		=		
4)	Five tenths			One tenth is less than five tenths.

Part 2

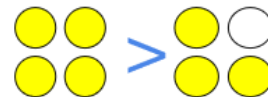
- A) There were 30 strawberries in a bag.
Aisha ate one tenth of the strawberries.
Khaled ate five tenths of the strawberries.

Who ate fewer strawberries?



- B) Draw your own mathematical pictures to compare fractions.

Use the correct symbol to compare their relationship.



> Greater than < Less than = is equal to